

Objective: To calculate angles in parallel lines



Met



Partially
Met



Not Met

Work on the
following sections:



Column 1



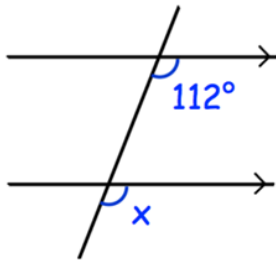
Column 2



Extension

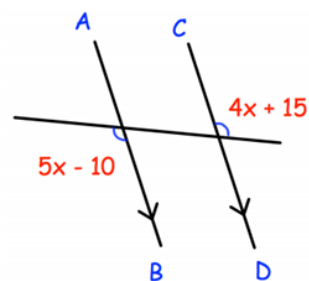
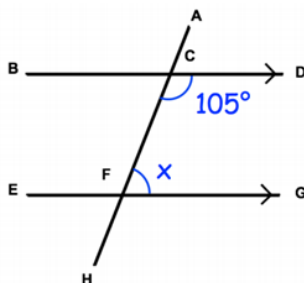
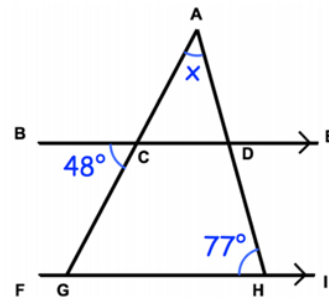
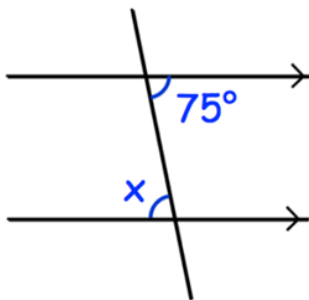
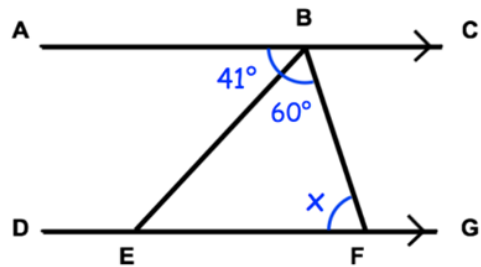
Column 1

For each question find the missing angle and state your reasons



Column 2

For each question find the missing angle and state your reasons



Extension Question:

Use your knowledge of angle facts to prove why angles within a triangle add up to 180 degrees.