

Objective: To work out the area of 2D shapes



Met




Partially  
Met



Not Met

Work on the following sections:



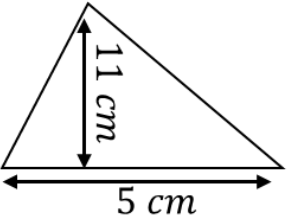
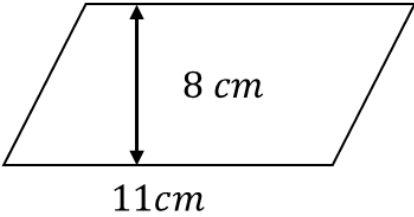
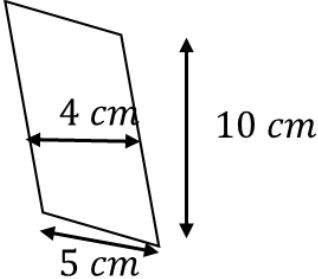
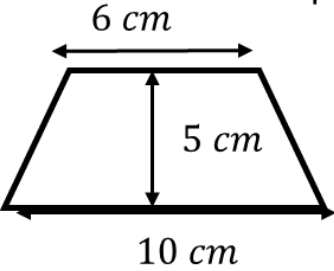
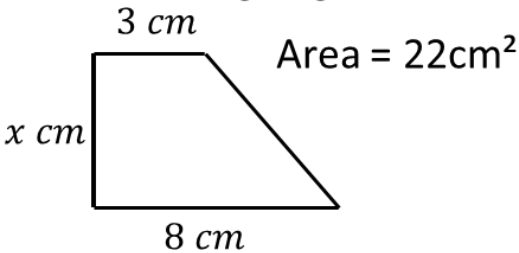
Column 1



Column 2



Extension

Column 1	Column 2
<p>Calculate the area of the triangle.</p> <p>Area= _____</p> 	<p>Draw a triangle that has an area of 20cm<sup>2</sup></p>
<p>Calculate the area of the parallelogram.</p> 	<p>Calculate the area of the parallelogram.</p> 
<p>Calculate the area of the trapezium.</p> 	<p>Calculate the missing length.</p> 

Extension: Explain how area and perimeter are different then explain how area and perimeter are similar.