

Objective: To calculate missing angles in triangles



Met




Partially  
Met



Not Met


Work on the  
following sections:



Section 1



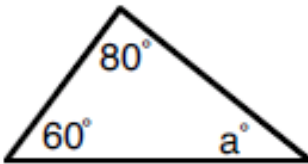
Section 2



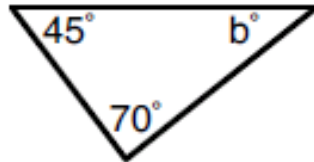
Extension

### Section 1

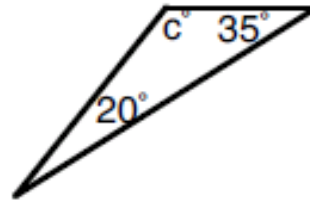
1).



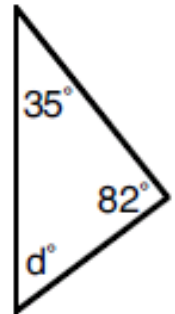
2).



3).

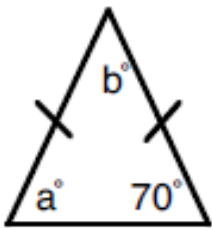


4).

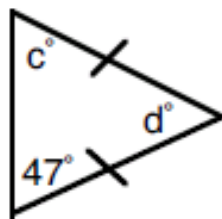


### Section 2

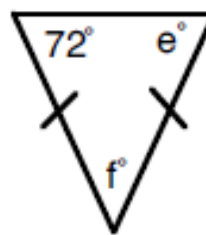
1).



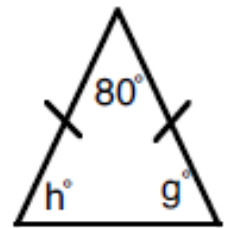
2).



3).



4).



### Extension Question

Calculate the missing angles.  
Give reasons for your answers.

