

Objective: To recognise and know conditions of congruent shapes



Met




Partially
Met



Not Met

Work on the following sections:



Column 1



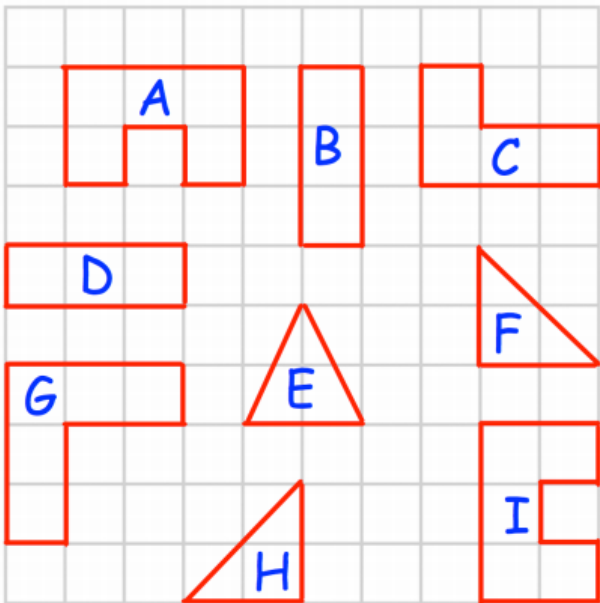
Column 2



Extension

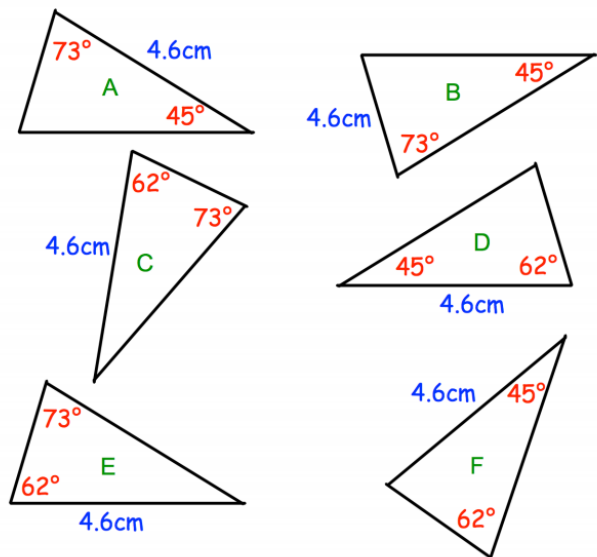
Column 1

State which pairs of shapes below are congruent



Column 2

Which of the triangles below are congruent? State the condition of congruency



Extension Question:

Gloria and Dina both draw a triangle with an angle of 35 degrees, an angle of 40 degrees and a side of 4cm.

Gloria says that the two triangles must be congruent under the condition of ASA.

Is Gloria correct? Explain your answer.