


Objective: TBAT round to significant figures



Met




Partially
Met



Not Met

Work on the following sections:



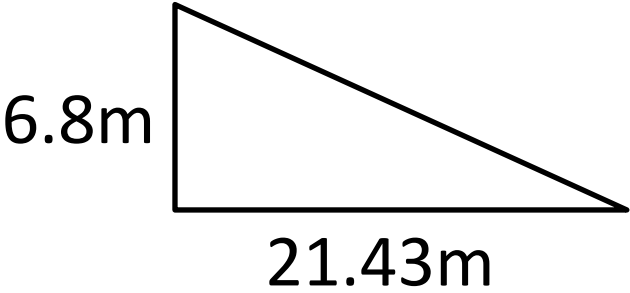
Column 1



Column 2



Extension

Column 1	Column 2
<p>Round the following to 1 significant figure:</p> <ul style="list-style-type: none">a) 670b) 548c) 1764d) 2895e) 0.0064	<p>In a cinema screen there are 33 rows. Each row contains 41 chairs. The cinema sells tickets for £12.67. How much money will the cinema take in ticket prices if every seat is filled? Give your answer to 2 significant figures.</p>
<p>Round the following to 2 significant figures:</p> <ul style="list-style-type: none">a) 349b) 294c) 3824d) 1948e) 0.06795	<p>A farmer's field is shown below:</p>  <p>The farmer wants to sell his field at a cost of £12.99 per square metre. Estimate how much money they farmer will make from selling his field.</p>
<p>Extension: A number was rounded to 1 significant and became 100. What could the original number have been before it had been rounded?</p>	